

TABLE OF CONTENTS

About the Authors ii

How to Use This Book iv







Teaching Suggestions iv

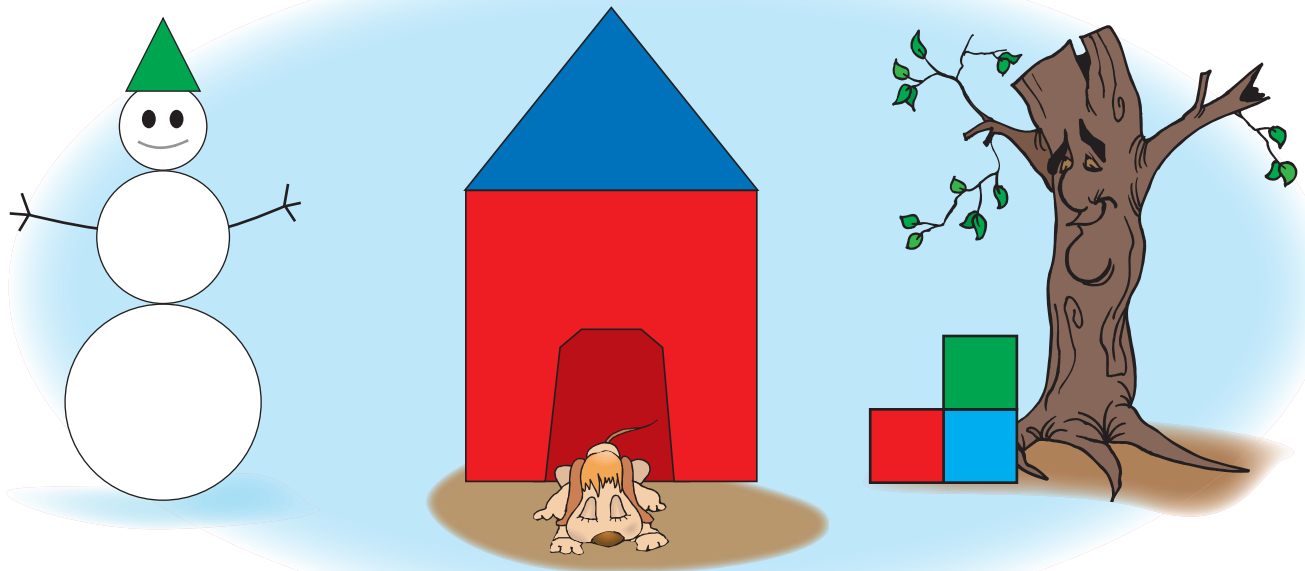
SKILLS	Number and Operations	Algebra	Geometry	Measurement	Data Analysis and Probability
Addition	64, 150, 180, 234	199, 209			231
Count	1, 2, 3, 4, 5, 7, 8, 9, 10, 11, 14, 17, 18, 19, 23, 26, 29, 31, 36, 69, 74, 86, 96, 97, 99, 117, 129, 131, 135, 144, 148, 155, 175, 183, 197	6, 83, 113, 184	21, 22, 25, 26, 104, 118, 194, 195, 206		12, 13, 28, 30, 32, 35, 41, 44, 48, 50, 51, 52, 55, 56, 59, 77, 152, 174, 176
Fractions	228, 229		202		
Language	54, 60, 66, 84, 85, 89, 106, 107, 140, 141, 145, 146, 178, 204	47, 53	38, 108, 112, 122, 133, 147, 209, 230	39, 61, 70, 72, 78, 79, 80, 81, 98, 100, 109, 114, 127, 137, 161, 165, 181, 182, 218, 223	67, 75, 76, 88, 91, 95, 124, 149, 157, 184, 211, 220
Manipulative			215		235
Match	37, 42, 138, 139, 142, 147, 151, 179	63, 169	43, 46, 62		34, 57, 71, 73, 82, 93, 104, 130, 132, 143, 153, 173, 212, 221
Order	102, 154, 156, 163, 170, 201		207	116, 200, 202, 219	68, 87, 115, 126, 216
Pattern	92, 134	20, 65, 101, 103, 105, 110, 128, 136, 168, 171, 192, 203, 208			94, 162
Shape	90, 189, 190, 210	45, 49, 112	15, 16, 24, 27, 33, 40, 58, 111, 119, 120, 121, 123, 147, 158, 159, 160, 164, 166, 167, 172, 177, 185, 193, 196, 222, 223, 233		125, 191, 198, 205, 232
Subtraction	213, 214, 217, 227, 236			224, 225, 226	186, 187, 188

Free resource from www.criticalthinking.com. Commercial redistribution prohibited

Point to the picture that matches the description.

- four red roosters
- four yellow sheep
- three blue fish
- four yellow horses

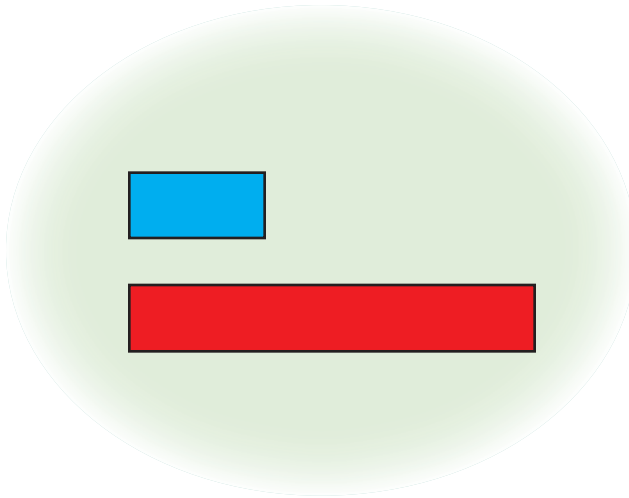
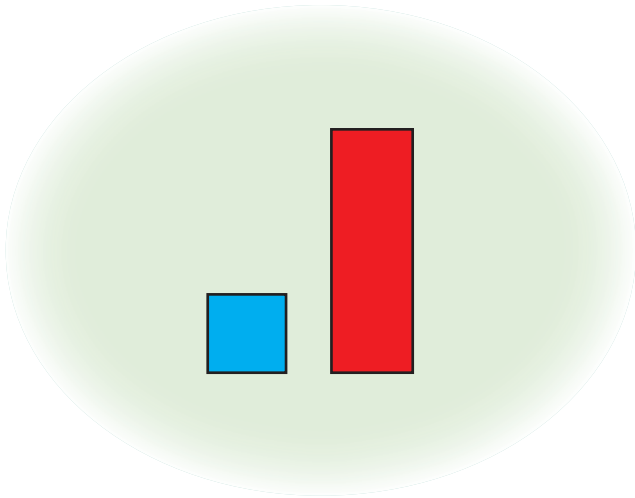
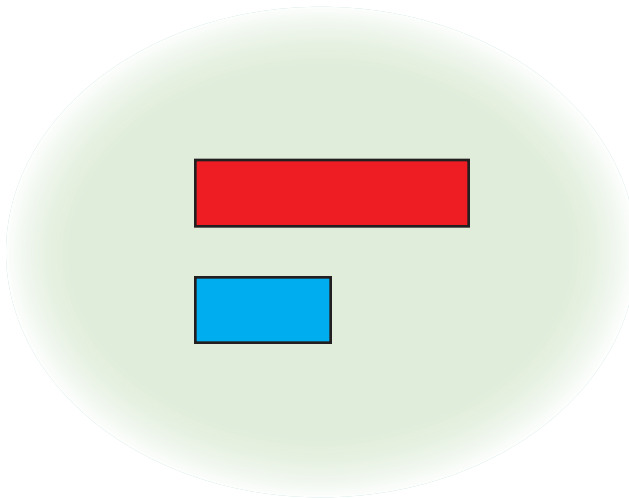
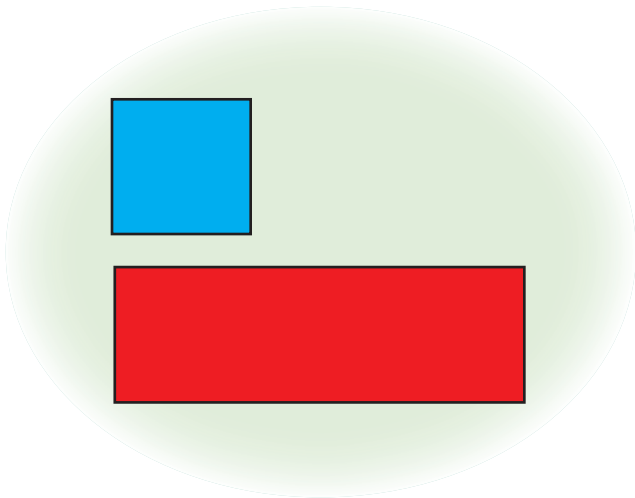
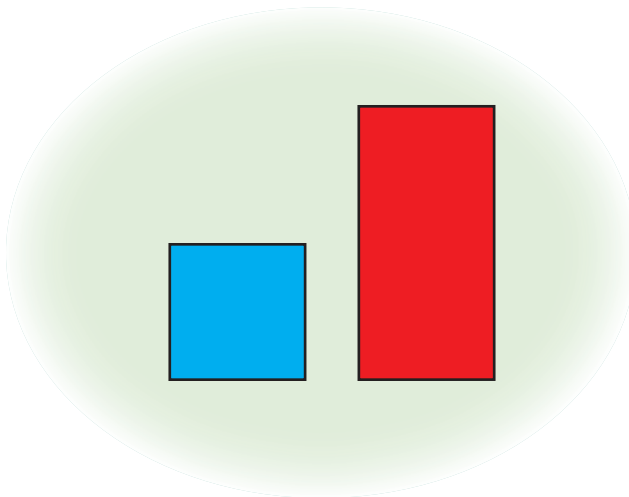
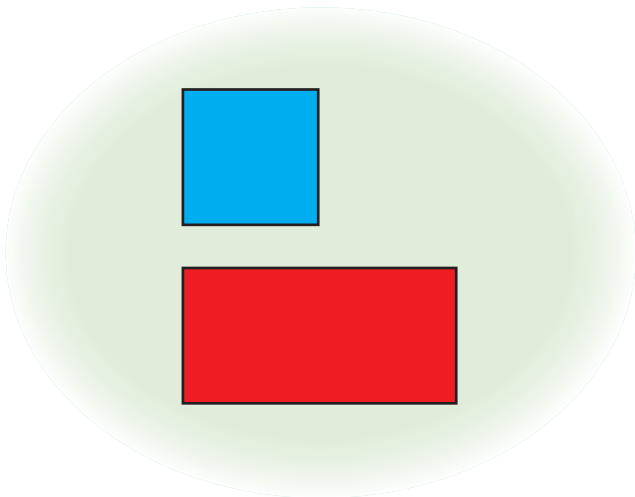




1. How many circles are in the picture?
2. How many squares are in the picture?
3. How many triangles are in the picture?
4. Are there more squares or triangles in the picture?
5. What is the largest shape in the picture?


Teaching Note: Five circles counting snowman's eyes. Four squares (3 stepping blocks and dog house). Two triangles (snowman's hat and roof of dog house).

Tell how many blue boxes will fit in each red box.



Free resource from www.criticalthinking.com. Commercial redistribution prohibited

1. There were this many fish inside my fish tank, but my cat ate two fish.




Put an X over 2 fish.

How many fish are left in the tank?

1 2 3 4 5

2. There were this many dogs in our yard, but four dogs left.

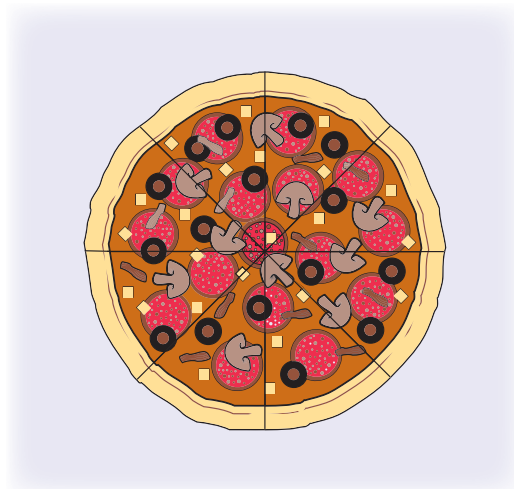





Put an X over 4 dogs.

How many dogs are left in the yard?

1 2 3 4 5



Draw a line segment to show how you would share half of the food in each picture.



CAN YOU FIND ME?™*

If there were one more,
 you would have four.
 If you like things sweet,
 you'll love me as a treat.

Of the pictures that you see,
 point to the one that is me.



*For more activities like this, see our *Can You Find Me?*™ series.

Free resource from www.criticalthinking.com. Commercial redistribution prohibited