

Table of Contents

About the Author	iii
Introduction.....	iv
Exercises	1
Answers.....	86

Free resource from www.criticalthinking.com. Commercial redistribution prohibited



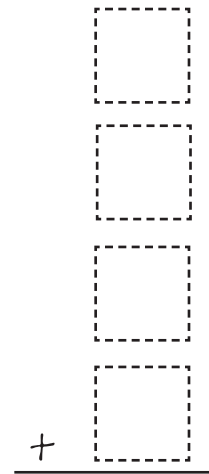
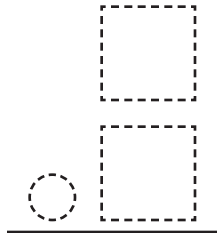
Panda Bear

The zoo has one more panda bear than polar bears. All three polar bears spend a lot of time in the water. Each bear at the zoo has its own 3 acre home.

What is the total number of acres used by all the panda bears' homes? _____


Write an addition sentence to prove your answer.

Write a multiplication sentence to prove your answer.



Complete and color the picture.





Goat

Dan, Jill, and Shannon each feed an animal on their farm. Dan's and Jill's animals each eat twice as many bags of feed each day as Shannon's animal. All of their animals together eat five bags of feed each day.

Which animal eats half as much food as Dan's animal? _____

Fill in the diagram to prove your answer.

	Dan's animal	Jill's animal	Shannon's animal	Total
Bags of feed per day				

Complete and color the picture.

