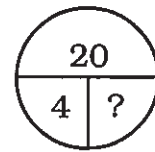
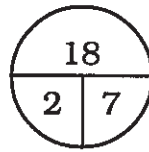
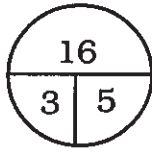


34. See if you can determine the logic to provide the missing number below.



35. Below are five versions of an unfolded cube. One of the five choices is impossible. Which one?

